



Monday

Maths

Phonics

Reading

Literacy


Link to story on youtube.

<https://www.youtube.com/watch?v=489micE6eHU>




23.11.2020


Maths- I can double amounts.




Double 6 is _____ .




Double 8 is _____ .




Double 10 is _____ .



Double 9 is _____ .



Double 5 is _____ .



Double 7 is _____ .

Match the number to its double like this: 3 → 6

5	4	14	10
6	8	8	
7	16	12	

$4+4=$

$2 \times 4 =$

$5+5=$

$2 \times 5 =$

$6+6=$

$2 \times 6 =$

$\underline{\quad} + \underline{\quad} = \underline{\quad}$

$2 \times \underline{\quad} =$

$\underline{\quad} + \underline{\quad} = \underline{\quad}$

$2 \times \underline{\quad} =$

Phonics- Swap the underlined word for one out of the box to change the sentences, read it again to check it makes sense.

Carl sat down on the carpet.

The sheep are in the shed.

I can see a toad on the road.

She has had lots of books.

They might meet in the town.

pool goats moon boots

farmyard chair fish car

23.11.2020 Reading-

Explain clearly what they understand about a text that they have read



Why did the teacher give Duncan a gold star?

What have you had a sticker for before at school?

How did you feel? (happy, sad, proud, excited)

23.11.2020 Literacy

I can label parts of the letter.

Duncan Cook
2 Sunny Lane
Hull

HU1 1AA

Monday 19th March

Dear Duncan,

All right, LISTEN.

I love that I'm your favourite crayon for grapes, dragons, and wizards' hats but it makes me crazy that so much of my gorgeous colour goes outside the lines. If you DON'T START COLOURING INSIDE the lines soon... I'm going to COMPLETELY LOSE IT.

From your very neat friend,

Purple Crayon.

Greeting - (Who the letter is to)	Information
Closing - (Who the letter is from)	Address
Date	



Tuesday

Maths

Phonics

Reading

Literacy

24.11.2020

Maths- I can multiply by 2.

There are 4 birds each bird lays 2 eggs.

How many eggs are there altogether? _____



$$2 \times 4 =$$

$$2 + 2 + 2 + 2 =$$

There are 5 bags in each bag are two sweets.

How many sweets altogether? _____



Complete the number sentence below

$$2 \times \underline{\quad} = \underline{\quad}$$

$$2 + 2 + \underline{\quad} + \underline{\quad} + \underline{\quad} = \underline{\quad}$$

There are 8 children in the class, they must complete 2 jobs each.

How many job's do they all complete? ____



$$2 \times \underline{\quad} = \underline{\quad}$$

Write the addition sentence below.

24.11.2020 Phonics- Match up the word to the right picture.



cobweb

exit

zigzag

quack

moth

24.11.2020 Reading-

Begin to make simple inferences about characters based upon what has been said or done

How can Duncan help purple crayon feel better?





How can yellow and orange sort their problem out?

What do you do if you have a disagreement with a friend at school?

Who can you talk to about this?

Literacy- I can reorder the letter thinking about the key features.

Cut up the letter and re-order the parts for the letter to make sense, remember you can listen to the story again following the link on first page.

Your very stubby friend

Blue Crayon

I have really enjoyed all those oceans, lakes and rivers, raindrops, rain clouds and clear skies.

It has been great being you favourite colour for the past year, and the year before and the year before that!

Dear Duncan,

But the bad news is that I am so short and stubby, I can't even see over the railing in the crayon box anymore!

I need a break!



Wednesday

Maths

Phonics

Reading

Literacy

25.11.2020 Maths

Can I solve problems by dividing?


10 sweets are shared equally between 2 children. How many do they each get?



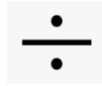
Complete the sentence 10 \div 2 =

8 cherries are shared equally between 2 children.

How many do each of them get?



Complete the number sentence 8



2 =

There are 12 cookies ready to share
two children.

How many do they each get?



between

Complete the number sentence

$$12 \div 2 = \underline{\quad}$$

Phonics- Read the words and draw a picture to match in box.

light

coat

road

boot

25.11.2020 Literacy-

What might rainbow crayon say in his letter to Duncan?

Will he be used a lot in the pictures or just a little? You choose.

Will he be happy or sad?

Tell me why.

Reading- After reading the letter from blue crayon how does he feel? Make sure you write in sentences and use capital letters and finger spaces and at the end you need a full stop.





Thursday

Maths

Phonics

Reading

Literacy

Maths- 26.11.2020

There are 2 monkeys and 10 bananas, can you share the between the two monkeys. How many do they each get?



There are 2 monkeys, can you share the bananas equally between the two?

How many bananas are here? _____



$$\underline{\hspace{2cm}} \div 2 = \underline{\hspace{2cm}}$$



This morning, Sarah made 8 chocolate cupcakes. Her brother ate half of them for his lunch. How many are left? _____

A car has 4 tyres. Half of the tyres have a puncture. How many tyres need to be repaired? _____

12 children were playing a game of football. Half of them were wearing red shirts. How many of them were wearing red shirts? _____

26.11.2020 Phonics-


Fill in the missing sounds to complete the words. First read the sounds aloud to help identify them.




ch _ _ _



b _ _ _ d



l _ _ _ tning



pict _ _ _

ure

igh

ear

air

26.11.2020 Reading-

How many letters did Duncan get from the crayons?

12

5

11

14

How many crayons are happy in their letter?

2

1

5

7

How many crayons are sad?

11

6

9

10

Which crayons are not talking?

- Red and blue
- Orange and yellow
- Black and white

Literacy-

How can Duncan help blue crayon feel better after reading his letter?

Think about the problem he has; remember he cannot see over the box and is very short now! Write two ideas in sentences to how Duncan can help him.

Duncan could.....



Friday

Maths

Phonics

Reading

Literacy

Maths-

27.11.2020

What is double 2? _____

What is double 4? _____

What is double 5? _____

What is double 6? _____


Write the number sentences for these double problems.



$2 \times 5 = \underline{\hspace{2cm}}$

$2 + 2 + 2 + 2 + 2 = \underline{\hspace{2cm}}$





What is half of 10? _____

What is half of 6? _____


What is half of 4? _____

What is half of 10?

Write the number sentence below.




What is half of 8?



27.11.2020

Phonics

Draw lines to match the caption with picture.



boats on the river

tools in the shed

a goat and a cow


fish and chips
on a dish

27.11.2020 Reading-

What is your favourite colour crayon?

Why do you like this colour?

Draw me a picture using just this colour.



Literacy- Write a letter to blue crayon today from Duncan use your ideas from yesterday to solve the problem he has.

Remember how a letter starts

Dear Blue Crayon
