



Home learning booklet

Year 3



Monday

Literacy

Reading

Maths

Rewrite the sentences adding in apostrophes where they are needed.

1. Johns cat need to go to the vets.
2. Sarah borrowed Steves football.
3. The teachers laptop has gone missing.
4. Andy likes to sit behind the drivers seat in the car.
5. The ladys bike has a puncture.
6. Petes dog has gone missing for two weeks.

07.12.2020 - Reading

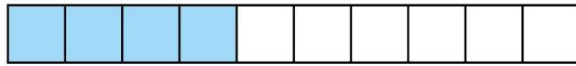


George's Marvellous Medicine


2e - explain events that take place in the text.

Use the information in chapter 7 - Grand takes the medicine and explain what happens to George's Grandma.


1) Match each bar model to the equivalent decimal



0.8

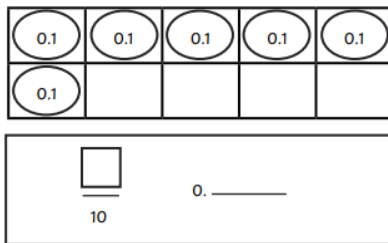


0.6



0.4

2) Use the image to complete the fraction and decimal



3) Draw lines to match the fractions to the correct decimals

$\frac{3}{10}$

0.9

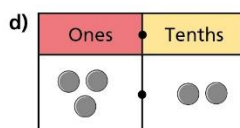
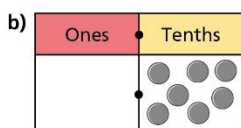
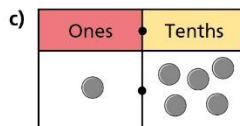
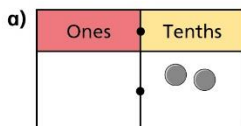
four-tenths

0.3

$\frac{9}{10}$

0.4

4) Mo is using a place value chart to represent numbers. Write down each number as a decimal.





Tuesday

Literacy

Reading

Maths

08.12.2020 - Reading



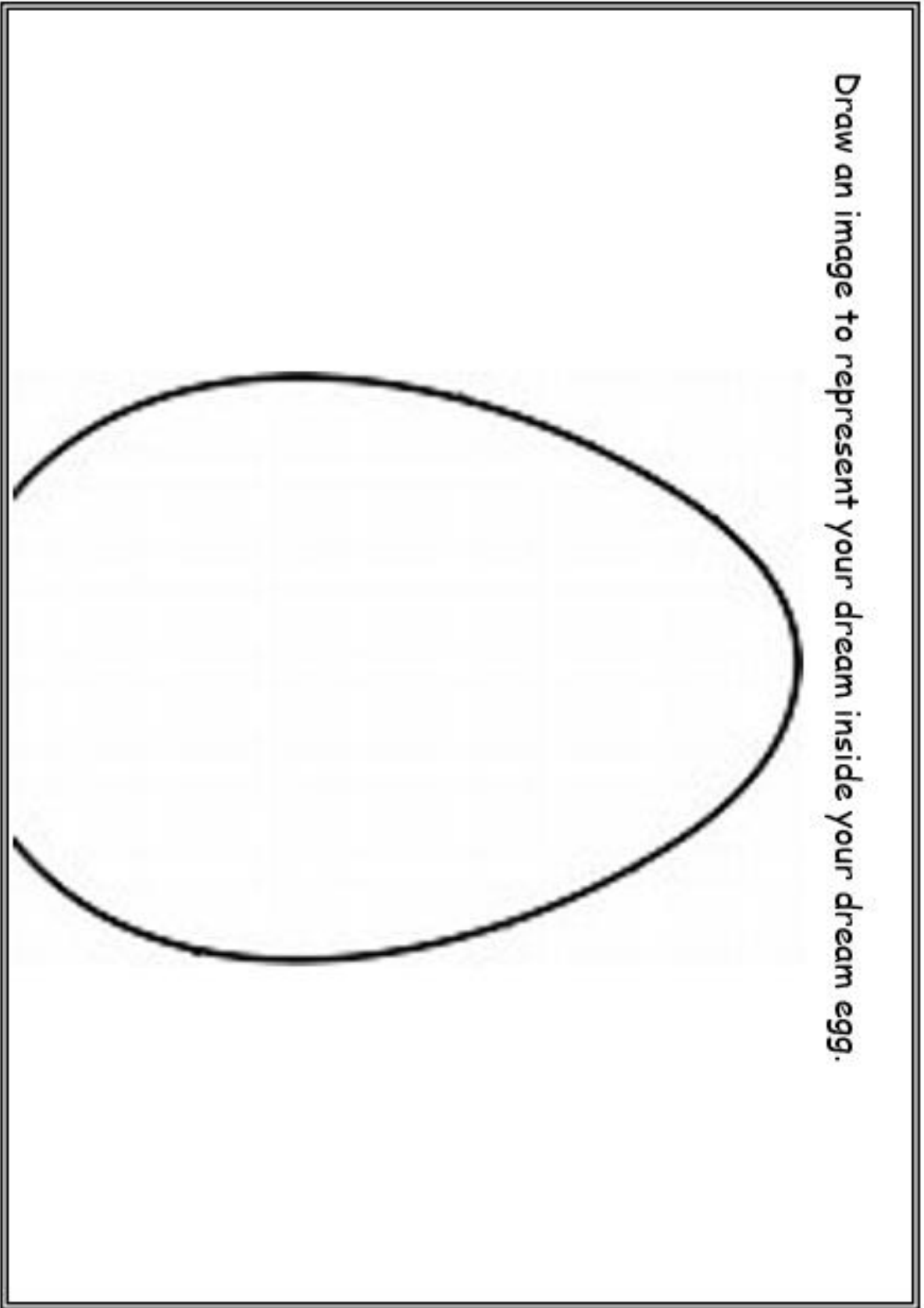
George's Marvellous Medicine

2e - identify how the narrative contributes to the meaning.

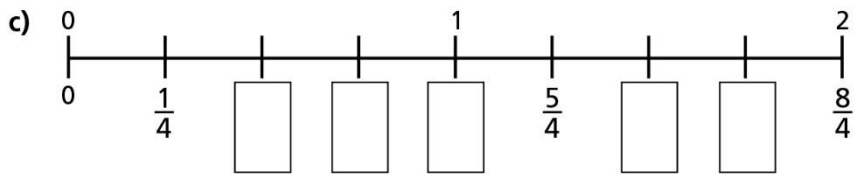
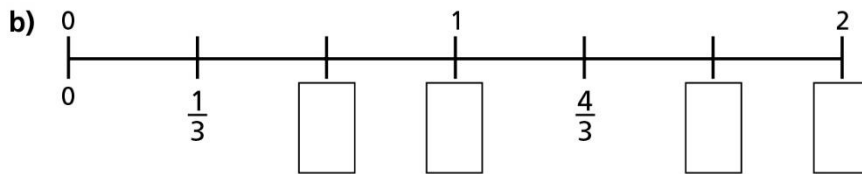
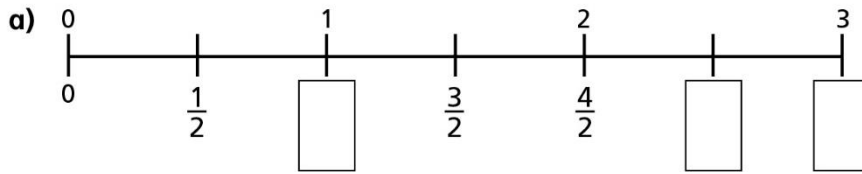
Using what you know about *Grandma* so far and the information on pages 50-52.

Explain how we know that *Grandma* thinks she is responsible for what happened to her.

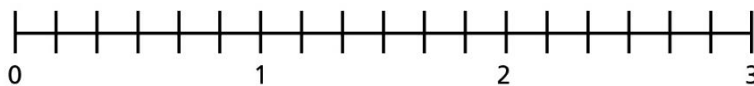
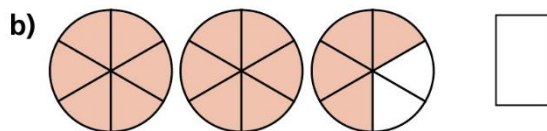
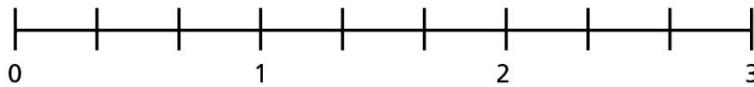
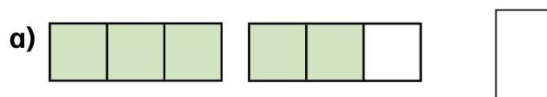
Draw an image to represent your dream inside your dream egg.



1) Write in the missing fractions on the number lines.



2) What fraction is shown in each picture? Draw an arrow to show the fraction on the number line.





Wednesday

Literacy

Reading

Maths

Change the sentence so that it includes an apostrophe for possession.

1. The house belongs to Steve and Amy.
2. A new book belonging to Doreen.
3. The photo belongs to Mike.

For each sentence below, explain the mistake before rewriting it.

4. Stephanies car has broken down.
5. Andy's borrowed Dylans pencil.
6. Fionas picture's are hung on the wall.



George's Marvellous Medicine

2e - identify how the narrative contributes to the meaning.

Using information on pages 53 - 55 to answer the question below.

Why does *George* feel that he has to feed medicine to the chicken?

1) Find and circle $\frac{1}{4}$ of the footballs.



2) A bar model can be used to find $\frac{1}{4}$ of 8.



Use this method to calculate:

a) $\frac{1}{4}$ of 12

b) $\frac{1}{4}$ of 16

c) $\frac{1}{3}$ of 15

3) This is $\frac{1}{4}$ of a punnet of strawberries. How many strawberries are in the whole punnet?



4) This is $\frac{1}{3}$ of a large box of eggs. How many eggs are in the whole box?





Thursday

Literacy

Reading

Maths

10.12.2020 - Literacy

Part	Questions to answer in the narrative.	What grammar feature will I include?
Opening	Where is it taking place? _____ Who is involved? _____ What can you see? _____	
Build-up	Who is the main character? _____ What do they look like? _____ What are they doing? _____ _____	
Problem	What happens to the dream eggs? _____ _____ What happens to the child's dream? _____ _____	
Resolution	What does the main character do? _____ _____ How does this stop the problem? _____ _____	
Ending	What happens to both characters in the end? _____ _____ _____	

10.12.2020 - Reading



George's Marvellous Medicine

2e - identify how the narrative contributes to the meaning.


Using information from chapters 7 and 8. Explain how the chicken and Grandma grow in different ways.

10.12.2020 - Maths

- 1) A bar model can be used to find $\frac{1}{4}$ of 8. If $\frac{1}{4}$ of 8 is 2 then:



- a) $\frac{2}{4}$ of 8 is ? b) $\frac{3}{4}$ of 8 is ?
- 2) Find and circle $\frac{2}{7}$ of the footballs.



- 3) Find the fractions of the amounts shown. Draw and use bar models to help you.
- a) $\frac{2}{3}$ of 15 b) $\frac{3}{8}$ of 16
- 4) Use a bar model and place value counters to find $\frac{2}{3}$ of 69.



Friday

Reading

Maths

Literacy

11.12.2020 - Reading



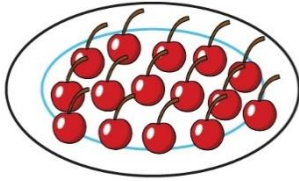
George's Marvellous Medicine

2e - identify how the narrative contributes to the meaning.

Using information from pages 59-62. Explain why *George's* family want to give the marvellous medicine to all the animals?

11.12.2020 - Maths

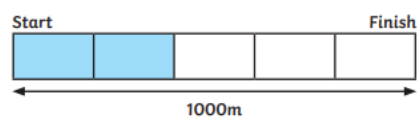
- 1) Teddy opens a bag of cherries and puts $\frac{1}{2}$ on a plate.



How many cherries were there in the whole bag?

- 2) Eva has a bag of 20 sweets.
She eats $\frac{1}{4}$ of the sweets.
She gives $\frac{1}{5}$ of the sweets that are left to Dora and 2 sweets to her mum.
How many sweets does Eva have left?

- 3) Troy is cycling home from school and has completed part of his journey.



- a) How many meters has Troy cycled?
b) How many metres does Troy have left to cycle?

